

St. Mary's Convent School, Ghaziabad
Mathematics Holiday Homework

Name - _____

Class - _____

Q1) Solve the given word problems.

1) There are 284 bags of sugar and 280 bags of rice in a godown. How many bags are there in all?

2) A fruit seller had 58 oranges . He sold 19 of them. How many oranges were left with him?

3) Mr.Johnson usually eats three meals a day. How many meals does he eat in a normal week?

Q2) Solve the following on the number line.

a) $18 - 5 =$ _____

b) $6 \times 3 =$ _____

c) $16 + 2 =$ _____

Q3) Write the corresponding multiplication for each.

a) $6 + 6 + 6 =$ _____

b) $8 + 8 + 8 + 8 + 8 =$ _____

c) $2 + 2 + 2 + 2 + 2 + 2 + 2 + 2 =$ _____

d) $7 + 7 + 7 + 7 =$ _____

Q4) Write the following as repeated addition.


a) $8 \times 3 =$ _____

b) $4 \times 5 =$ _____

c) $4 \times 9 =$ _____







d) $7 \times 7 =$ _____

Q5) Complete the picture of the clock by writing the missing numbers on its dial.

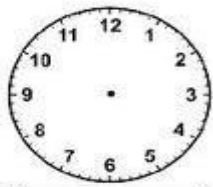


Write the time when you wake up in the morning. a.m.

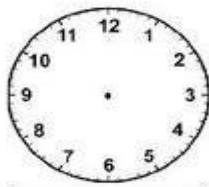
Q6) Write the time.

<p>1 a.</p>  <p>___ : ___</p>	<p>1 b.</p>  <p>___ : ___</p>
<p>2 a.</p>  <p>___ : ___</p>	<p>2 b.</p>  <p>___ : ___</p>
<p>3 a.</p>  <p>___ : ___</p>	<p>3 b.</p>  <p>___ : ___</p>

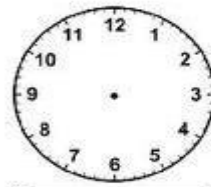
Q6) Draw the hands to show the time.



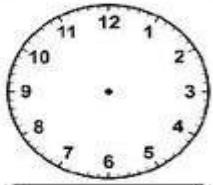
6 : 00



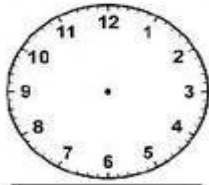
10 : 00



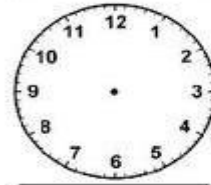
2 : 00



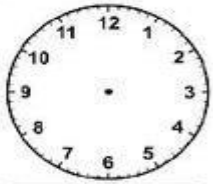
12 : 00



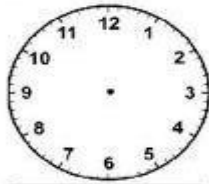
4 : 00



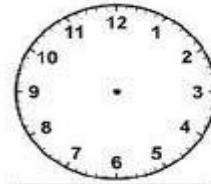
8 : 00



5 : 00



11 : 00



1 : 00