







WORKSHEET




Subtract by counting the objects and fill in the boxes :



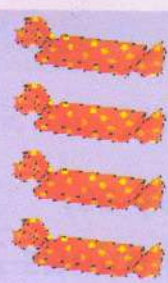
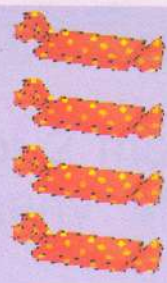

- =



- =



- =

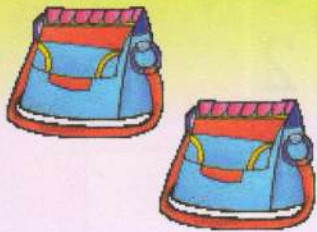


- =



WORKSHEET

Add by counting the objects and fill in the boxes :



+




=




+



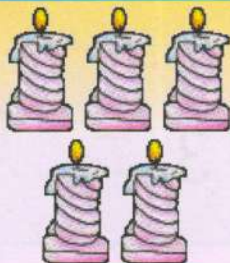

=



+




=



+

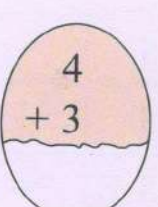
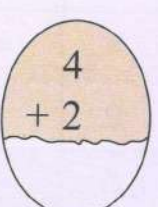
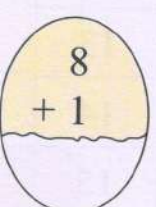
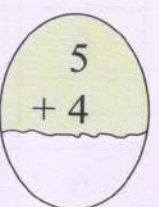
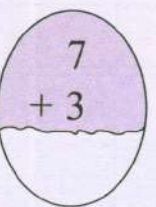
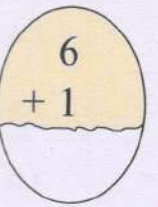
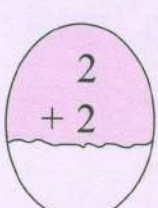
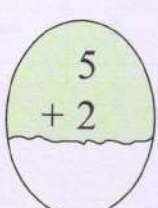
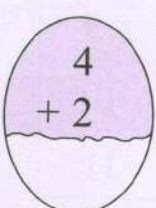
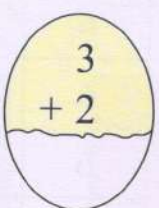
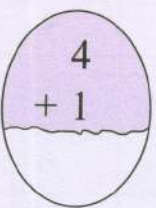
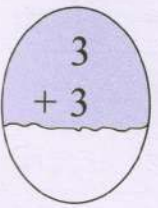
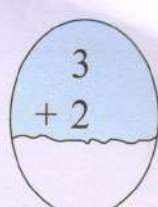
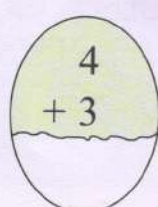
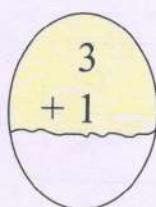
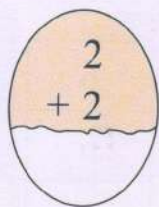
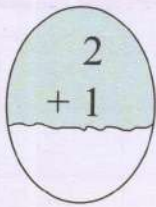
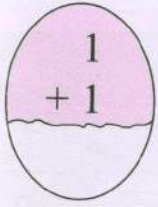


=



Activity

Add and fill in the blanks:



Add and write the numbers in the blank box:

$$2 + 5 = \square$$

$$8 + 2 = \square$$

$$1 + 6 = \square$$

$$6 + 2 = \square$$

$$4 + 3 = \square$$

$$5 + 4 = \square$$

$$8 + 1 = \square$$

$$7 + 2 = \square$$

Activity

Subtract and fill in the blanks:

$$\begin{array}{r} 2 \\ -1 \\ \hline \end{array}$$

$$\begin{array}{r} 3 \\ -1 \\ \hline \end{array}$$

$$\begin{array}{r} 4 \\ -2 \\ \hline \end{array}$$

$$\begin{array}{r} 4 \\ -1 \\ \hline \end{array}$$

$$\begin{array}{r} 5 \\ -3 \\ \hline \end{array}$$

$$\begin{array}{r} 6 \\ -2 \\ \hline \end{array}$$

$$\begin{array}{r} 9 \\ -3 \\ \hline \end{array}$$

$$\begin{array}{r} 4 \\ -1 \\ \hline \end{array}$$

$$\begin{array}{r} 3 \\ -2 \\ \hline \end{array}$$

$$\begin{array}{r} 7 \\ -2 \\ \hline \end{array}$$

$$\begin{array}{r} 5 \\ -2 \\ \hline \end{array}$$

$$\begin{array}{r} 3 \\ -2 \\ \hline \end{array}$$

$$\begin{array}{r} 6 \\ -1 \\ \hline \end{array}$$

$$\begin{array}{r} 7 \\ -3 \\ \hline \end{array}$$

$$\begin{array}{r} 5 \\ -4 \\ \hline \end{array}$$

$$\begin{array}{r} 8 \\ -1 \\ \hline \end{array}$$

$$\begin{array}{r} 4 \\ -2 \\ \hline \end{array}$$

$$\begin{array}{r} 4 \\ -3 \\ \hline \end{array}$$

Subtract and write the numbers in the blank box:

$$5 - 1 = \square$$

$$8 - 2 = \square$$

$$6 - 3 = \square$$

$$6 - 2 = \square$$

$$4 - 3 = \square$$

$$9 - 4 = \square$$

$$8 - 5 = \square$$

$$7 - 2 = \square$$