

NEAR AND FAR



Tick (✓) the one who is near the winning post and cross (x) the one who is far away.



Objectives

- + Observation
- + Identification
- + Visual discrimination

Teacher's Signature: .....

Date: .....

## FRONT AND BEHIND




The girl is in front of the car.



The boy is behind the curtain.

Tick (✓) the one who is in front of the tree and cross (×) the one who is behind it.



Objectives

• Observation + Identification + Visual discrimination


Teacher's Signature: .....

Date: .....



## Activity

Look at the picture given below carefully. In it, some children are waiting to enter the zoo.



Fill in the blanks based on the above picture.

1. Sonu is standing in the ..... place.
2. .... is standing in the 4th place.
3. Sara is standing in the ..... place.
4. Rahim is standing in the ..... place.
5. .... is standing in the 5th place.

Date: .....

Teacher's Signature: .....



## Activity

Match the numbers with their names.

two

six

five

ten

one

seven

four

nine

three

eight

1

6

4

3

8

9

10

2

5

7

### Objectives

+ Observation + Identification + Visual discrimination


Teacher's Signature: .....

Date: .....



## Activity 5

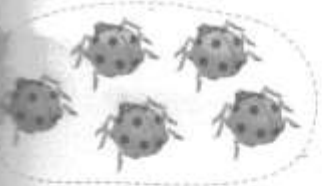
Match the number names with the correct number of objects.



one



five



ten



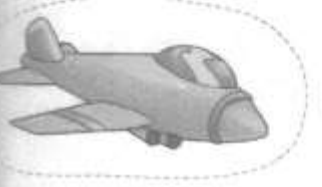
four




two



six




nine



three



seven



eight

Observation + Identification + Visual discrimination


Teacher's Signature: .....

Date: .....




## Activity

Colour the 5th balloon in orange, 2nd balloon in yellow, 4th balloon in green, 1st balloon in blue, 6th balloon in pink and 3rd balloon in red colour.



Colour the 5th apple from the left.



Fill in the blocks. (In V A R A N A S I)

1st 2nd 3rd 4th 5th 6th 7th 8th

1. In VARANASI: The 5th letter is
2. The 7th letter is
3. V is the  letter.
4. The 3rd letter is
5. The 8th letter is



Date: .....

Teacher's Signature: .....

 **Activity**

Colour the balls that are before the number 10 in green.  
Colour the balls that are after the number 10 in orange.



How many balls are there between 5 and 15? Circle the correct answer.

- 8      9      10      11

**Objectives**


+ Observation + Identification + Visual discrimination

Teacher's Signature: .....


Date: .....



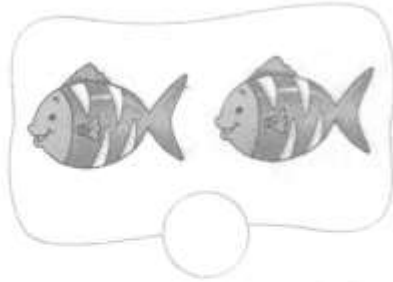
Add the following.



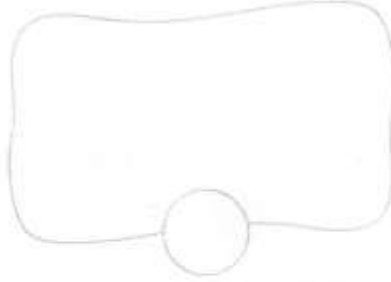
+



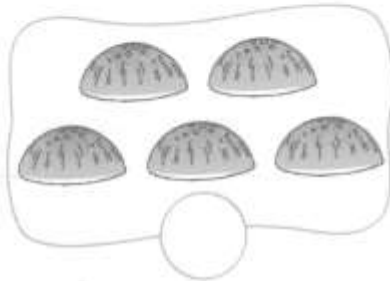
=



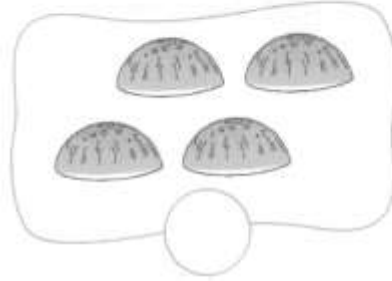
+



=



+



=



+



=



Date: .....

Teacher's Signature: .....





## Activity

Solve these sums.

Ram bought 7 pink balls and 5 green balls.

How many balls did he buy in all?


Raj has 6 pencils. Ria has 2 pencils. How

many pencils do they have in all?


There are 10 roses and 6 tulips on a table.

How many flowers are there on the table?


Mahi had 15 dolls. She received 13 dolls on her birthday.

How many dolls does she have now?


Seema sang 3 songs while Radha sang 5 songs.

How many songs did they sing in all?


Pari ate 8 toffees. Her father gave her 6 toffees.

She ate them too. How many toffees did she eat in all?


Date: .....

Teacher's Signature: .....

